

Let's Update
Subject – English
Class – I (2020-21)

Revision sheet Unit – I

Section – A (Reading)

I Read the passage carefully and answer the questions that follow.

All the animals in the zoo are going for a picnic on Sunday. They are going to the Animal Park on the river side. There is slide, a see – saw and a swing in that park. They are carrying nuts bananas, apples, carrots, sandwiches and cakes to eat. They are carrying a bat and a ball for playing.

Answer the following questions.

Q1 Where are the animals of the zoo going for a picnic?

Ans. _____

Q2 Make a list of things in the park?

Ans. _____

Q3 What are the things that animals carrying for eating?

Ans. _____

Q4 Write True or False.

(a) Animals are going for a picnic on Monday. _____

(b) They are going to the river for boating. _____

Section – B (Writing)

II Write five lines on ‘My Best Friend’.

III. Write five lines on ‘My School’.

Section – C (Grammar)

IV. Punctuate the following sentences.

1. riya is a pretty girl

2. akhil loves working on his computer

3. we visited the science museum yesterday

4. the new satellite was launched successfully

5. the astronauts reached back safely

6. rohan is a doctor

7. tom and me are friends

8. i love my mother

9. my father is a doctor

10. where is your bag

11. alok plays the flute beautifully

12. who are you

V. Fill in the blanks with this/that:


1. _____ is a star.




2. _____ is a balloon.



3. _____ is a car.




4. _____ is a flower.




5. _____ is a pen.



6. _____ is a mango.



7. _____ is a tree.



VI. Fill in the blanks with is/am/are:

1. Gaurav _____ taller than me.

2. I _____ 8 years old.

3. Where _____ you going?

4. I _____ going to the market.

5. Sita and Gita _____ good friends.

6. Delhi _____ the capital of India.
7. We _____ going to zoo.
8. I _____ a boy.
9. My teacher _____ fair.
10. The boys _____ playing football.

VII Underline nouns.

1. Look at the moon.
2. Please give me your book.
3. Stand up Abdul.
4. The cat is chasing a rat.
5. Kolkata is a large city.
6. Akbar was a great king.
7. The desk is made of wood.
8. Birds build nests.

VIII Write the opposite gender of the following:

- | | | | | | |
|-----------|---|-------|-------------|---|-------|
| 1. pig | - | _____ | 6. drake | - | _____ |
| 2. nephew | - | _____ | 7. mother | - | _____ |
| 3. uncle | - | _____ | 8. husband | - | _____ |
| 4. man | - | _____ | 9. king | - | _____ |
| 5. prince | - | _____ | 10. brother | - | _____ |

IX. Circle the action words in the following sentences.

1. I play in the park.
2. I drink milk daily.
3. The rabbit runs very fast.

4. A fish swims in water.
5. The sun rises in the east.
6. Flowers grow in the garden.

X Write the names of babies of the following animals:

- | | | | | | |
|----------|---|-------|--------|---|-------|
| 1. Duck | - | _____ | 4. Cat | - | _____ |
| 2. Horse | - | _____ | 5. Dog | - | _____ |
| 3. Goat | - | _____ | | | |

MCB

XI Word Meanings

- 1 find - _____
- 2 purr - _____
- 3 quickly - _____
- 4 afraid - _____
- 5 finish - _____

XII Make Sentences

- 1 forest - _____
- 2 eat - _____
3. find - _____
4. classroom - _____
5. elephant - _____
6. Sunday - _____

XIII Rhyming Words

1. food - _____

2. came - _____
3. hen - _____
4. care - _____
5. sad - _____

XIV Jumbled Words

1. h y p p a - _____
2. m t r e h o - _____
3. l k o o - _____
4. s y o w n - _____
5. l n c u n - _____

XV Write the answers of the following questions:

Q1. Why is snowy sad?

Ans. _____

Q2. What does Tuki hide in the pot?

Ans. _____

Q3. Where were Jo and Kit going?

Ans. _____

Q4. Who took care of Lin and Min?

Ans. _____

Q5. Why did Billy put one paw inside the house?

Ans. _____

Revision Sheet

I Look at the picture given below and answer the following questions.



Q1 How many children are playing in the park?

Ans. _____

Q2 Where is the statue?

Ans. _____

Q3 What are the dogs doing?

Ans. _____

Q4 Choose the correct answer.

(a) The bench is in the _____ (corner, middle) of the park.

(b) The children are _____ (swinging, sliding)

(c) It is a picture of a _____ (park, play ground)

II It is evening. Keshav is in his room. He is now free. He sits on the sofa and switches on the T.V. The sofa is near the window. Outside, some pigeons are flying in the sky. They are making a lot of noise. There is a mango tree in front of Keshav's house. A sparrow is sitting on a branch. There is a bench under the tree. An old man is sitting on it. He is reading a newspaper.

Answer the following questions.

Q1 Where is Keshav in the evening?

Ans. _____

Q2 Where he sits?

Ans. _____

Q3 Who is flying in the sky?

Ans. _____

Q4 What are pigeons doing?

Ans. _____

Q5 Who is sitting on the bench?

Ans. _____

III It is a lovely morning. The children are at the beach. They are playing. Sana and Manu are in the water. Deepa is making a sandcastle. Their pet dog Moti, wants to help her. Shyam and Jamal are playing with the ball. All of them are enjoying themselves. After their games, all the friends will go to Jamal's house.

Answer the following questions.

Q1 Where are the children?

Ans. _____

Q2 Who are in the water?

Ans. _____

Q3 Who is making a sandcastle?

Ans. _____

Q4 Whose house all the children going?

Ans. _____

Q5 Pick out any two nouns. (a) _____ (b) _____

IV Amit and Raj are going to the river for a picnic. They are going on their bicycles. Their picnic lunch is in a basket. The basket is on the carrier of Amit's bicycle. They are carrying sandwiches, cakes and bananas for lunch.

Answer the following questions.

Q1 Where are Amit and Raj going?

Ans. _____

Q2 How are they going?

Ans. _____

Q3 What are they carrying for lunch?

Ans. _____

Q4 Pick out one word for the given phrases.

(a) name of a fruit _____ (b) baker bakes these _____

Q5 Make sentences by using words given. (a) picnic (b) river

Ans. _____



This document was created with the Win2PDF "print to PDF" printer available at <http://www.win2pdf.com>

This version of Win2PDF 10 is for evaluation and non-commercial use only.

This page will not be added after purchasing Win2PDF.

<http://www.win2pdf.com/purchase/>

Let's Update
Subject – EVS
Class – I (2020-21)

Revision Sheet Unit– 1
Lesson - 3, 4, 5, 8

Q1 Fill in the blanks:

- (a) Our mother's mother is our _____.
- (b) Family members should _____ each other.
- (c) There are _____ main meals in a day.
- (d) We need _____ to live.
- (e) We like to play in the _____.

Q2 True or false:-

- (a) To board a bus, we go to bus stop.
- (b) Our father and mother are our siblings.
- (c) We use oil and spices to cook food.
- (d) We live in a house with wild animals.
- (e) We have only one type of house.

Q3 Match the following:

- | | |
|-------------------|---------------------|
| (a) chips | (i) from animals |
| (b) meat | (ii) morning |
| (c) kitchen | (iii) to study |
| (d) school | (iv) exercise |
| (e) breakfast | (v) junk food |
| (f) bus stop | (vi) to cook food |
| (g) park | (vii) rest |
| (h) small family | (viii) fire engines |
| (i) bedroom | (ix) nuclear family |
| (j) fire fighters | (x) bus |

Q4 Name them:-

- (a) a type of family - _____
- (b) a junk food - _____
- (c) a meal of a day - _____
- (d) a milk product - _____
- (e) a room of a house - _____
- (f) a type of house - _____
- (g) a place in your neighbourhood - _____

Q5 Answer the following questions:-

1. What is a family?

Ans. _____

2. Who are cousins?

Ans. _____

3. Why do we need food?

Ans. _____

4. When do we eat food?

Ans. _____

5. Why do we need a house?

Ans. _____

6. Why do we have windows in a house?

Ans. _____

7. Who are neighbours?

Ans. _____

8. What do we do in the park?

Ans. _____

9. Draw two junk food.



This document was created with the Win2PDF "print to PDF" printer available at <http://www.win2pdf.com>

This version of Win2PDF 10 is for evaluation and non-commercial use only.







This page will not be added after purchasing Win2PDF.

<http://www.win2pdf.com/purchase/>

Let's Update
Subject – Maths
Class – I (2020-21)

Revision sheet Unit – I
Chapter – 1 to 5

1. Match the object with the same number.

(a)		6
(b)		1
(c)		4
(d)		3
(e)		7
(f)		2

2. Comparison.

(a) Tick (✓) the object which is big and cross (x) the small.

W **w**

(b) Cross (x) the object which is light and tick (✓) the heavy.



(c) Tick (✓) the object which is long and cross (x) the short.



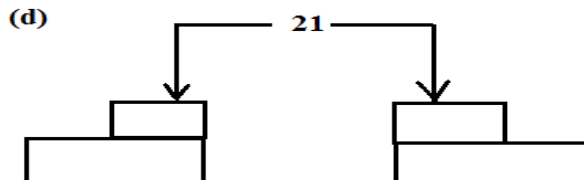
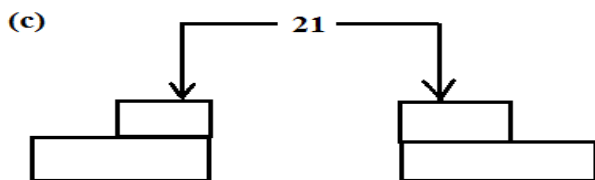
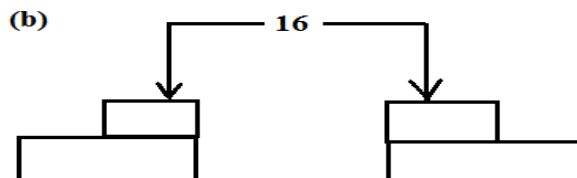
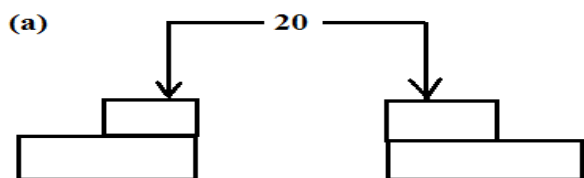
3. Write the number names:

- (a) 14 - _____
- (b) 20 - _____
- (c) 9 - _____
- (d) 3 - _____
- (e) 11 - _____
- (f) 19 - _____

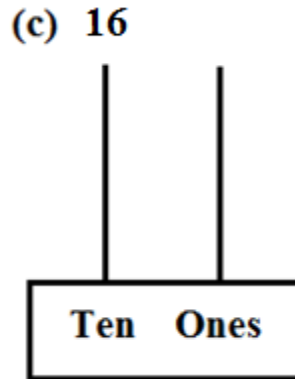
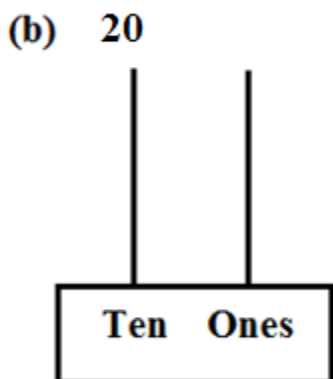
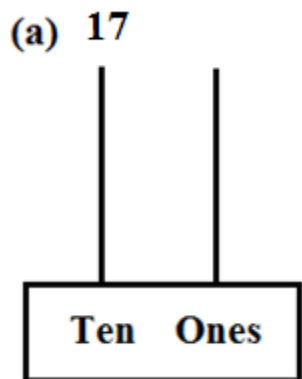
4. Write the numerals:

- (a) Sixteen
- (b) Twelve
- (c) Eighteen
- (d) Five
- (e) Ten
- (f) Twenty

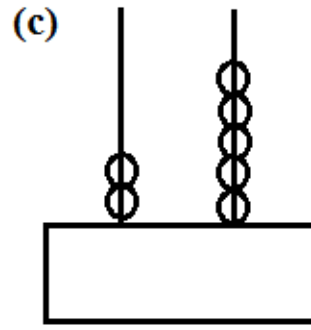
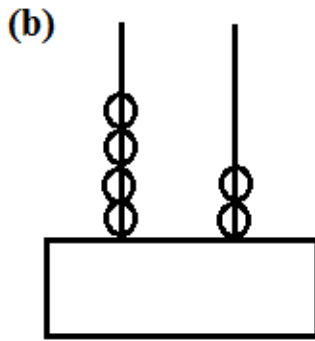
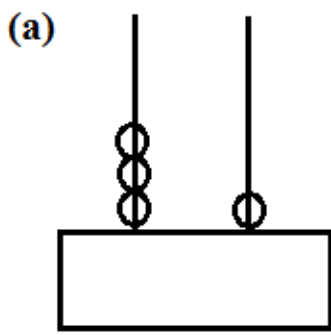
5. Complete the following.



6. Draw the beads on the abacus to show the given numbers.



7. Write the numbers as shown on the abacus.



8. Write the number that comes just before, after and between

(a) 15

(a) 20

(a) 12 14

(b) 17

(b) 9

(b) 18 20

(c) 9

(c) 16

(c) 9 11

(d) 20

(d) 7

(d) 14 16

9. Circle the biggest number in the given group.

(a)

(b)

(c)

10. Write the correct symbol (<, >, =) in the boxes.

(a) 13 17

(f) 7 7

(b) 20 15

(g) 14 14

(c) 13 13

(g) 20 12

(d) 2 10

11. Arrange the numbers in ascending order.

(a) 9, 2, 4, 7, 1
_____, _____, _____, _____, _____

(b) 13, 15, 11, 20, 10
_____, _____, _____, _____, _____

12. Arrange the numbers in descending order.

(a) 10, 7, 8, 9, 6


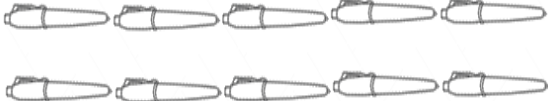
_____, _____, _____, _____, _____

(b) 20, 10, 5, 18, 9

_____, _____, _____, _____, _____

13. Count the objects and add the following.

(a)  = 
 + =

(b)  = 
 + =

14. Add the following.

(a) $6 + 2 = \square$

(a) $2 + 3 = \square$

(b) $4 + 4 = \square$

(c) $7 + 2 = \square$

(b) $2 + 2 = \square$

(c) $6 + 4 = \square$

(d) $5 + 2 = \square$

(d) $3 + 3 = \square$

(e) $3 + 0 = \square$

(e) $0 + 4 = \square$

15. Add on the number line.

(a) $4 + 4 = \square$ 

(b) $5 + 2 = \square$ 

(c) $3 + 1 = \square$ 

16. Subtract the following.

(a) $9 - 2 = \square$

(b) $7 - 1 = \square$

(c) $4 - 3 = \square$

(d) $6 - 2 = \square$

(e) $8 - 4 = \square$

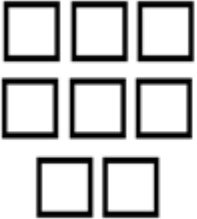
(a) $6 - 5 = \square$


(b) $6 - 6 = \square$


(c) $7 - 0 = \square$

(d) $5 - 3 = \square$

17. Cross out to subtract.

(a)  $8 - 3 = \square$

(c)  $8 - 4 = \square$

(b)  $9 - 4 = \square$

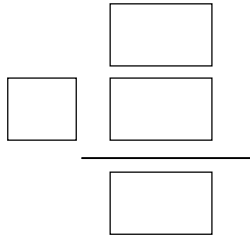
(d)  $5 - 5 = \square$

18. Word problem.

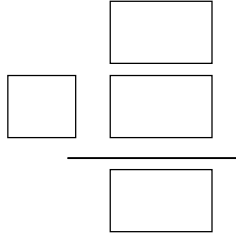
A Simi has 3 pens and Ravi has 4 pens. Together they have _____ pens.

$$\begin{array}{r} \square \\ \square \\ \square \\ \hline \square \end{array}$$


B Dev has 4 books. He got 2 more now he has _____ books.



C There 6 girls in the class. 3 girls went out. Girls left in the class _____




D Mona has 8 toffees. She ate 4 toffees. Toffees left with her _____



19. Dodging table.

- (a) $2 \times 6 =$ _____
- (b) $3 \times 4 =$ _____
- (c) $4 \times 7 =$ _____
- (d) $2 \times 9 =$ _____
- (e) $4 \times 6 =$ _____
- (f) $3 \times 9 =$ _____

20. Match A the following.

- (a) twenty 4
- (b) $4 + 4$ 20
- (c) 11 9
- (d)  12
- (e) $9 - 0$ eleven
- (f) 2×6 8



This document was created with the Win2PDF "print to PDF" printer available at <http://www.win2pdf.com>

This version of Win2PDF 10 is for evaluation and non-commercial use only.

This page will not be added after purchasing Win2PDF.

<http://www.win2pdf.com/purchase/>